



UNIVERSITY OF CAMBRIDGE INTERNATIONAL EXAMINATIONS  
International General Certificate of Secondary Education

CANDIDATE NAME

CENTRE NUMBER

--	--	--	--	--

CANDIDATE NUMBER

--	--	--	--

**MATHEMATICS**

**0580/11**

Paper 1 (Core)

**October/November 2011**

**1 hour**

Candidates answer on the Question Paper.

Additional Materials:      Electronic calculator                      Geometrical instruments  
  Mathematical tables (optional)                      Tracing paper (optional)

**READ THESE INSTRUCTIONS FIRST**

Write your Centre number, candidate number and name on all the work you hand in.

Write in dark blue or black pen.

You may use a pencil for any diagrams or graphs.

Do not use staples, paper clips, highlighters, glue or correction fluid.

**DO NOT WRITE IN ANY BARCODES.**

Answer **all** questions.

If working is needed for any question it must be shown below that question.

Electronic calculators should be used.

If the degree of accuracy is not specified in the question, and if the answer is not exact, give the answer to three significant figures. Give answers in degrees to one decimal place.

For  $\pi$ , use either your calculator value or 3.142.

At the end of the examination, fasten all your work securely together.

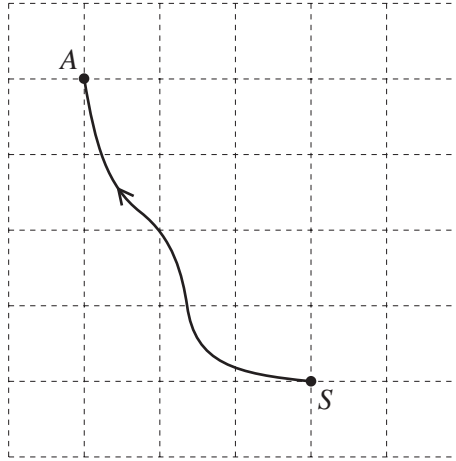
The number of marks is given in brackets [ ] at the end of each question or part question.

The total of the marks for this paper is 56.

This document consists of **11** printed pages and **1** blank page.



1



The diagram shows the map of part of an orienteering course. Sanji runs from the start,  $S$ , to the point  $A$ .

Write  $\vec{SA}$  as a column vector.

Answer  $\begin{pmatrix} \phantom{0} \\ \phantom{0} \end{pmatrix}$  [1]

2 When Ali takes a penalty, the probability that he will score a goal is  $\frac{4}{5}$ .

Ali takes 30 penalties.

Find how many times he is expected to score a goal.

Answer ..... [2]

3 The ratio of Anne's height : Ben's height is 7:9.  
Anne's height is 1.4 m.

Find Ben's height.

Answer ..... m [2]

For  
Examiner's  
Use

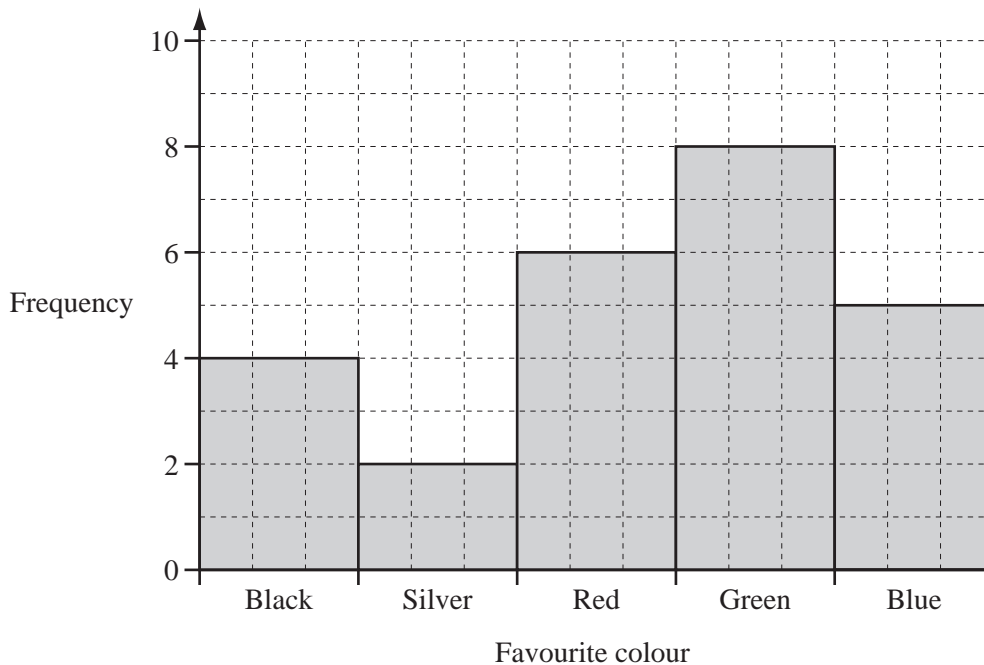
- 4 The distance between the centres of two villages is 8 km.  
A map on which they are shown has a scale of 1 : 50 000.

Calculate the distance between the centres of the two villages on the map.  
Give your answer in centimetres.

*For  
Examiner's  
Use*

*Answer* ..... cm [2]

5



The bar chart shows the favourite colours of students in a class.

- (a) How many students are in the class?

*Answer(a)* ..... [1]

- (b) Write down the modal colour.

*Answer(b)* ..... [1]

6 Use your calculator to find  $\sqrt{\frac{45 \times 5.75}{3.1 + 1.5}}$ .

For  
Examiner's  
Use

Answer ..... [2]

---

7 (a) Calculate 60% of 200.

Answer(a) ..... [1]

(b) Write 0.36 as a fraction.  
Give your answer in its lowest terms.

Answer(b) ..... [2]

---

8 A circle has a radius of 50 cm.

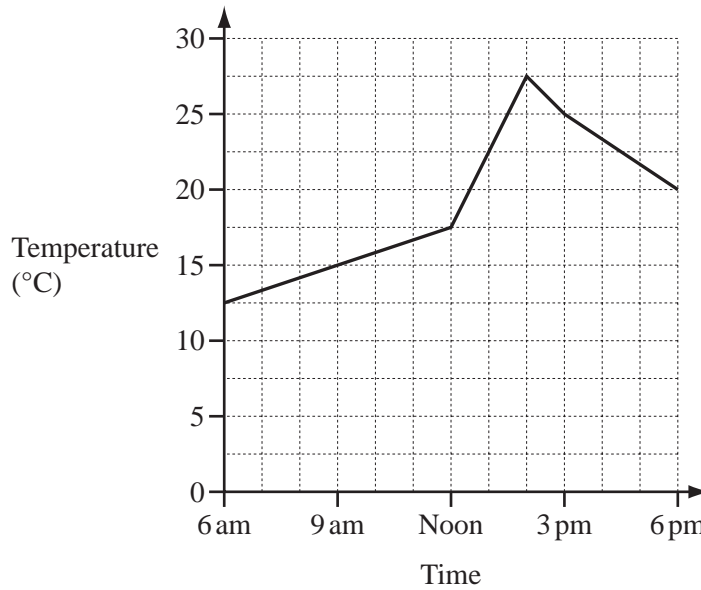
(a) Calculate the area of the circle in  $\text{cm}^2$ .

Answer(a) .....  $\text{cm}^2$  [2]

(b) Write your answer to **part (a)** in  $\text{m}^2$ .

Answer(b) .....  $\text{m}^2$  [1]

---



The graph shows the temperature in Paris from 6 am to 6 pm one day.

(a) What was the temperature at 9 am?

Answer(a) ..... °C [1]

(b) Between which two times was the temperature decreasing?

Answer(b) ..... and ..... [1]

(c) Work out the difference between the maximum and minimum temperatures shown.

Answer(c) ..... °C [1]

10 (a) Write down the mathematical name of a quadrilateral that has exactly two lines of symmetry.

Answer(a) ..... [1]

(b) Write down the mathematical name of a triangle with exactly one line of symmetry.

Answer(b) ..... [1]

(c) Write down the order of rotational symmetry of a regular pentagon.

Answer(c) ..... [1]

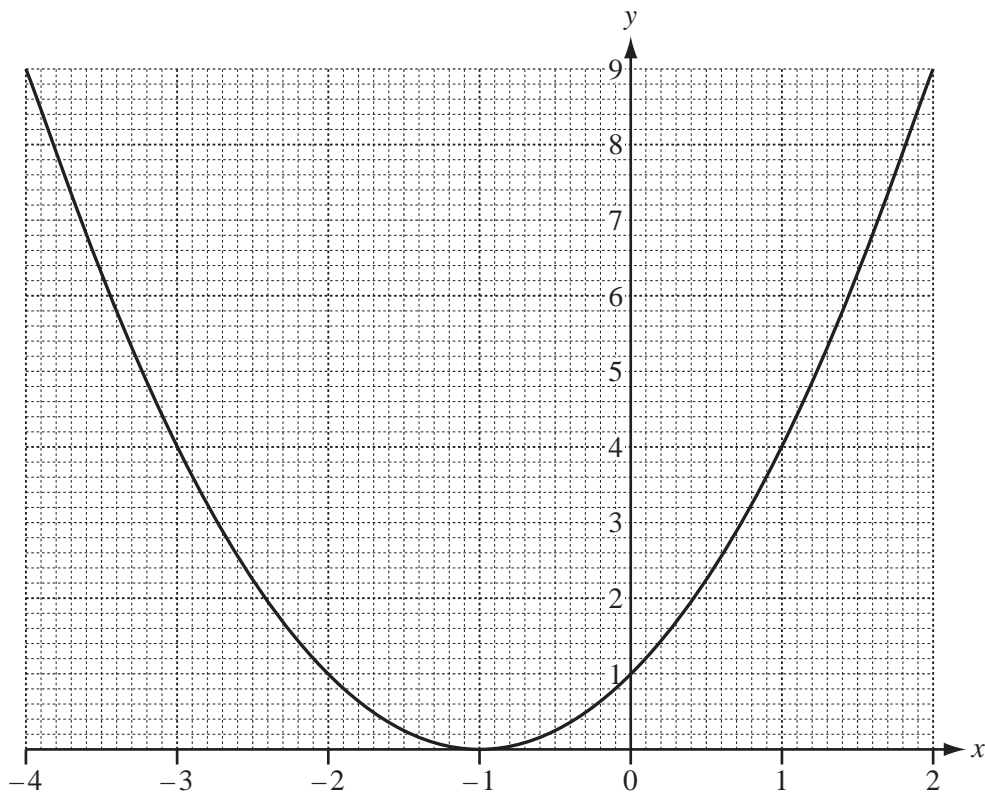
- 11 Without using your calculator, work out  $\frac{1}{2}\left(\frac{2}{3} + \frac{1}{4}\right)$ .

Show all your working clearly and give your answer as a fraction.

For  
Examiner's  
Use

Answer ..... [3]

12

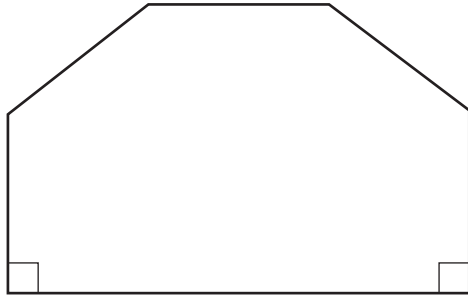


The diagram shows the graph of  $y = (x + 1)^2$  for  $-4 \leq x \leq 2$ .

- (a) On the same grid, draw the line  $y = 3$ . [1]
- (b) Use your graph to find the solutions of  $(x + 1)^2 = 3$ .  
Give each solution correct to 1 decimal place.

Answer(b)  $x =$  ..... or  $x =$  ..... [2]

13

NOT TO  
SCALEFor  
Examiner's  
Use

The front of a house is in the shape of a hexagon with two right angles.  
The other four angles are all the same size.

Calculate the size of one of these angles.

Answer ..... [3]

14 (a) Expand and simplify.

$$2(3x - 2) + 3(x - 2)$$

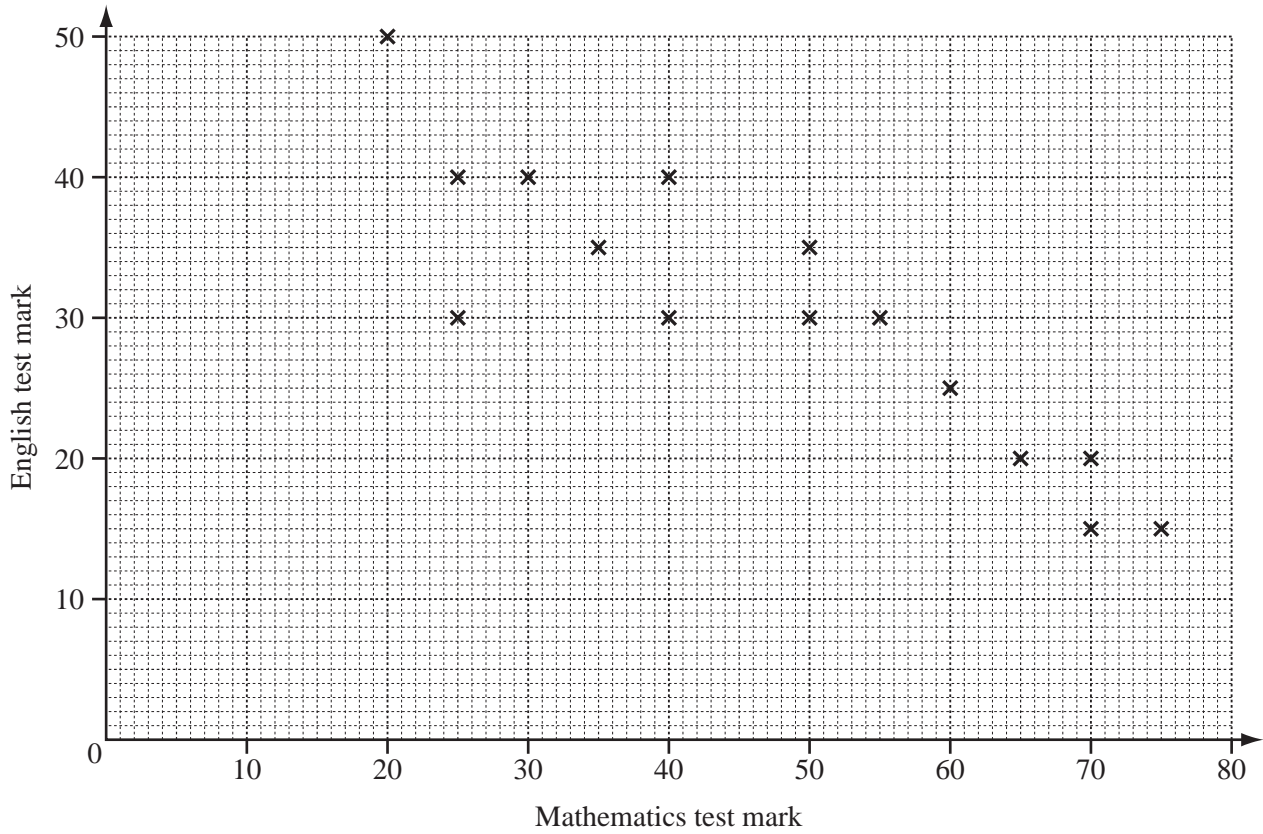
Answer(a) ..... [2]

(b) Expand.

$$x(2x^2 - 3)$$

Answer(b) ..... [2]

15



For  
Examiner's  
Use

The scatter diagram shows the marks obtained in a Mathematics test and the marks obtained in an English test by 15 students.

(a) Describe the correlation.

Answer(a) ..... [1]

(b) The mean for the Mathematics test is 47.3 .  
The mean for the English test is 30.3 .

Plot the mean point (47.3, 30.3) on the scatter diagram above. [1]

(c) (i) Draw the line of best fit on the diagram above. [1]

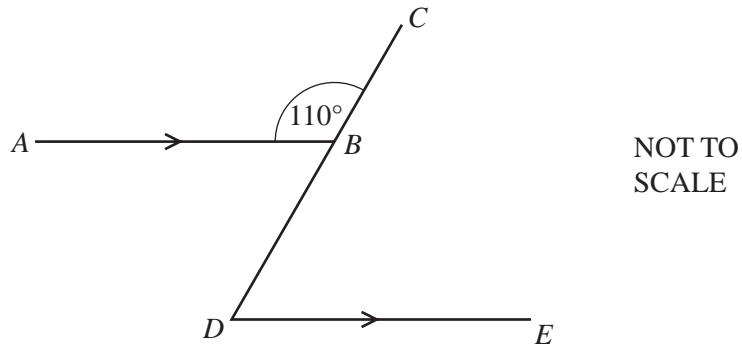
(ii) One student missed the English test.  
She received 45 marks in the Mathematics test.

Use your line to estimate the mark she might have gained in the English test.

Answer(c)(ii) ..... [1]



16 (a)

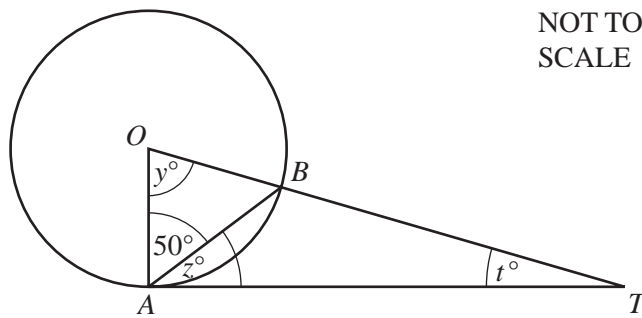


In the diagram,  $AB$  is parallel to  $DE$ .  
 Angle  $ABC = 110^\circ$ .

Find angle  $BDE$ .

Answer(a) Angle  $BDE = \dots\dots\dots$  [2]

(b)



$TA$  is a tangent at  $A$  to the circle, centre  $O$ .  
 Angle  $OAB = 50^\circ$ .

Find the value of

(i)  $y$ ,

Answer(b)(i)  $y = \dots\dots\dots$  [1]

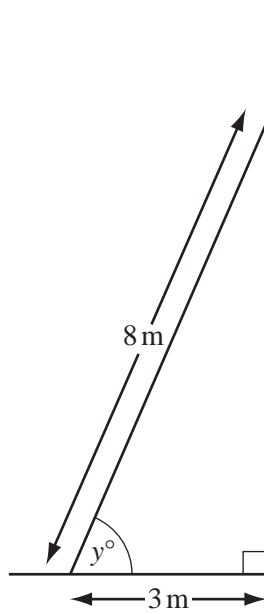
(ii)  $z$ ,

Answer(b)(ii)  $z = \dots\dots\dots$  [1]

(iii)  $t$ .

Answer(b)(iii)  $t = \dots\dots\dots$  [1]

For  
 Examiner's  
 Use



NOT TO  
SCALE

The diagram shows a ladder, of length 8 m, leaning against a vertical wall. The bottom of the ladder stands on horizontal ground, 3 m from the wall.

- (a) Find the height of the top of the ladder above the ground.

Answer(a) ..... m [3]

- (b) Use trigonometry to calculate the value of  $y$ .

Answer(b)  $y =$  ..... [2]

18 (a) Lucinda invests \$500 at a rate of 5% per year **simple** interest.

Calculate the interest Lucinda has after 3 years.

*Answer(a)* \$ ..... [2]

(b) Andy invests \$500 at a rate of 5% per year **compound** interest.

Calculate how much more interest Andy has than Lucinda after 3 years.

*Answer(b)* \$ ..... [4]

---

*For  
Examiner's  
Use*

**BLANK PAGE**

---

Permission to reproduce items where third-party owned material protected by copyright is included has been sought and cleared where possible. Every reasonable effort has been made by the publisher (UCLES) to trace copyright holders, but if any items requiring clearance have unwittingly been included, the publisher will be pleased to make amends at the earliest possible opportunity.

University of Cambridge International Examinations is part of the Cambridge Assessment Group. Cambridge Assessment is the brand name of University of Cambridge Local Examinations Syndicate (UCLES), which is itself a department of the University of Cambridge.